



SUCCESS INTEGRATED PRIMARY SCHOOL

END OF SEPTEMBER EXAMINATION 2020

P.1 LITERACY 1A

Time allowed: 1hr 45min

NAME _____ STREAM _____

SECTION A

1. A _____ is a place where people live.

2. Write our school motto.

3. Who heads a family?

4. What do school children use to write in books?

5. Name one thing we use to drink water.

6. Write one member in a mosque community.

7. Why do your parents go to the markets?

8. Name the school structure below.




(kitchen, chicken)

9. A group of people living or working together is called a

10. Why do we need cooks in our school?

11. Draw one material used to build a house.



12. Why do you put on uniform when coming to school?

13. Why do we put on sweaters on a cold day?

14. Give one activity done at home.

15. Where do your parents get food?

16. Who keeps law and order in our community?


17. Name the animal kept for security.

18. What is the main natural source of water?

19. Mention one type of food eaten at school.

20. Give one use of money.

21. Name the classroom object.



22. Draw and name one basic need of man.

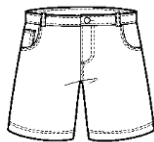


23. Why should your parents work?

24. How can a P.1 child make the school compound dirty?

25. Mention one need of a school. _____

26. Name this school symbol.



27. How many colours does our school flag have?

28. A _____ is a state of atmosphere at a given place and time. (**Weather, Wheather**)

29. Parts of an anthem are called _____

30. Who teaches pupils at school?

31. Name one role of a driver.

32. Give one item used for cooking food.

33. Give any one item found in a school library.

34. Name this important place in the community.



35. In which village is your school found?


36. Write the name of our director.

(Mr. Kitandwe Thomas, Mrs. Jennipher Kasisiri)

37. Who cares for the children in a family?

38. Why do people keep animals?

39. Give the use of this garden tool drawn.



40. What is the use of a television in our homes?

SECTION B

41. a) Name these things we wear in a given weather.



(umbrella, gumboots, glasses, sweater, coat, shoes)

b) State any two conditions of weather.

i) _____ ii) _____

42. **Match correctly.**

- | | |
|--------------|---------------------|
| (i) doctor | where money is kept |
| (ii) bank | treats sick people |
| (iii) barber | grows crops |
| (iv) farmer | trims hair |

43. **Draw these common accidents.**

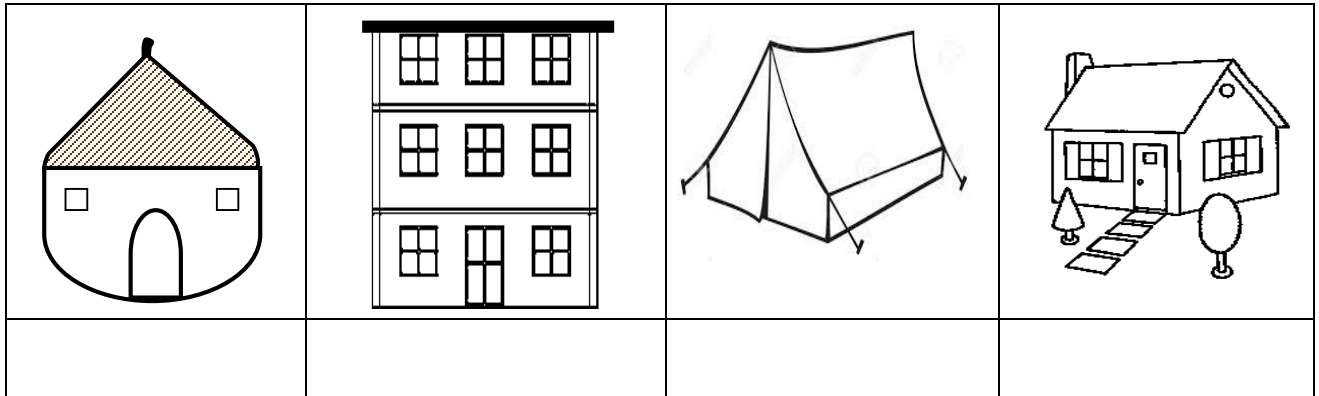
snake bite	car accident	falling off the tree	dog bite

44. a) Name any two items used to clean our school.

i) _____ ii) _____

b) Why do we need cleaners in our school?


45. a) Name these shapes of the houses.

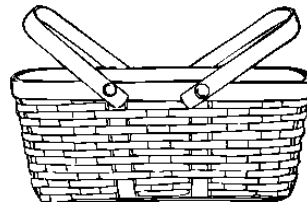


(bungalow, hut, flat, tent)

b) Give one way of caring for a house?

46. Name these things we use in the kitchen.






47. a) _____ are animals that live in the bush or forest.

b) State any two examples of wilds animals you know.


i) _____ ii) _____

48. Draw these sources of water.


lake



spring



river



Success!