


GLOBAL JUNIOR SCHOOL

SOCIAL STUDIES SET I

1. What is the meaning of the word vegetation?
.....
2. State one medical importance of vegetation to man.
.....
3. Why is animal rearing most suitable in savanna areas of Africa?
.....
4. How does altitude influence vegetation distribution of an area?
.....
5. Draw a symbol of a forest in the space below.


6. Write R.G.S in full.
.....
7. Why did most explorers to East Africa enter through Tanzania instead of Kenya which was a shorter route?
.....
8. Give one reason why it was difficult to bring slave trade to an end in East Africa.
.....
9. Give any one way forests promote agriculture in Uganda.
.....
10. Name one economic importance of mangrove vegetation.
.....
11. State one reason why mangrove vegetation grows well in coastal areas.
.....
12. Mention one factor that influences vegetation distribution in deserts.
.....
13. What is trade?
.....

14. State any one way oases promote vegetation growth.
.....
15. Why did Christianity spread faster than A.T.R ?
.....
16. What does the term 'Caravan trade' mean?
.....
17. State any one reason why school children are encouraged to conserve grass planted in the school compound.
.....
18. Mention any one difference between natural and planted forests.
.....
19. Why was Trans-Atlantic trade also called Triangular trade?
.....
20. Give any one way NEMA conserves the environment.
.....
21. Write one way missionaries protected themselves long ago.
.....
22. How does massive cutting down of trees lead to prolonged drought?
.....
23. Why is Bwindi impenetrable forest National Game Park having many mountain gorillas?
.....
24. In which vegetation zone do trees with root system below grow?
.....



Buttress root system

25. Write down the type of wood that is mainly got from Mediterranean vegetation zone.
.....
26. State one factor that make equatorial regions to have evergreen vegetation.
.....
27. What name is given to the tropical grasslands of South Africa?

28. Name one economic activity carried out in temperate grasslands.

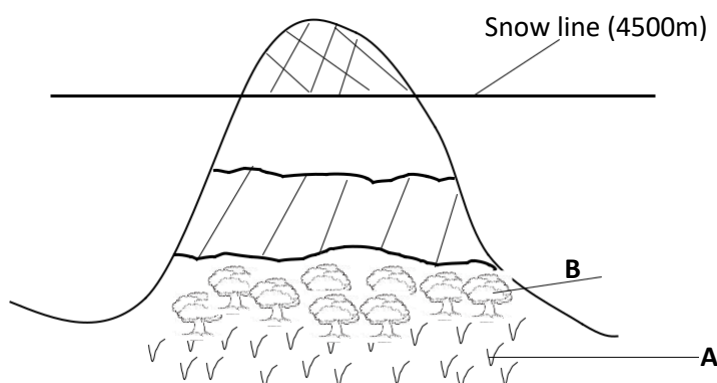
29. Mention any one example of citrus fruit tree grown in Mediterranean areas.

30. Give the meaning of the term 'global warming'.

31. Name the group of foreigners that introduced Zebu cows?

32. Why was Asia not called a dark continent by Europeans?

Study the drawing below.



33. What major economic activity is carried out in the area marked A.

34. Give a reason why area marked B is suitable for lumbering.

35. Mention the weather instrument that determines the snow line as shown in the diagram above.

36. What was Uganda known as during the colonial period?

37. Name the element which shows a map reader what the map is about.

38. Mention any one problem the local council committee solves in a community.

39. Name the feature on a road that motorists, cyclists and pedestrians use to cross a river.

40. How did Indians promote trade in East Africa?

Or: (a) From what did Allah create man?


(b) Why did Allah create man?

(c) State any one way man cares for each of these creations of Allah.

(i) animals _____

(ii) plants _____

52. **Either:** (a) Draw a cross in the space provided below.




(b) Apart from the cross, name other two symbols of a Christian family.

(i) _____

(ii) _____

(c) Give one reason why Sunday is a very important day for Christians.

Or: (a) Draw a crescent in the space provide below.



(b) Apart from the crescent, name other two symbols of a Muslim family.

(i) _____

(ii) _____

(c) Give one reason why Friday is a very important day for Muslims.

53. **Either:** (a) How did the following people meet their death?

(i) Jesus Christ _____

(ii) Judas Iscariot _____

(b) What happened to Jesus on each of these days?

(i) Good Friday _____

(ii) Easter Sunday _____

Or: (a) Write brief notes about each of the following people;

(i) Amina

(ii) Hadijah

(iii) Abdallah

(iv) Mohammad

54. **Either:**

(a) Who baptized Jesus Christ?

(b) Apart from baptism, mention any other two sacraments a Christian should have.

(i)

(ii)

(c) How is baptism important to a Christian?

Or: (a) State any four pillars of faith (Iman)

(i)

(ii)

(iii)

(iv)

55. **Either:** (a) Write the first three ten commandments of God.

(i)

(i)

(ii)

(b) Where was Moses when the Ten Commandments were given to him?

Or:

(a) What is Prophet Ibrahim known for in Islam?

(b) In which city do we find the Kaaba?

(c) State the importance of the Kaaba to a Muslim.

(d) Give any one thing you can do to show that you obey Allah.

END