

SECTION A (40 Marks)

1. Name **ONE** inland port found on Lake Victoria in Tanzania.

2. Give the opposite direction of South west on a compass.

3. What title is given to the head of civil servants in Uganda?

4. How did Semei Lwakirenzi Kakungulu promote development in Eastern Uganda?

5. Name the chief who is remembered for his resistance to colonial rule in Northern Uganda.

6. Mention the British governor who formed the first legislative council (LEGCO) in Uganda.

7. What term is used to mean the action of planting many trees in an area in replacement of those ones cut down?

8. What process led to the formation of Lake Albert?


9. On a given map of East Africa, the scale is 1cm: 75km. Calculate the actual distance between two places on the map which are 5cm apart.

10. Name the organization out of which the former East African Community was formed.

11. Define the term "**Latitude**" in relation to climate.

12. Why is the "**lee ward**" side of a mountain not suitable for crop growing?

13. _____



14. Name the type of budget shown above.

15. Give a reason to support your answer you have given for number 13 above.

16. At which place was the administrative capital of Nyungu Ya mawe located?

17. Why do coastal plains of Africa experience high temperatures?

18. Why do we need good roads in our communities?

19. Why are shades in the school compound important to learners?

20. How is a map reader able to tell what the map is about?

21. Which continent is separated from Africa by the Mediterranean Sea?

22. Why is 8th October, 1995 important to Uganda?

23. Mention one enslave country located in Southern Africa.

24. Name the bank which is responsible for controlling other banks in Uganda.

25. How did the 1900-Buganda Agreement affect land in Buganda?

26. Mention the factor which led to the final collapse of the Bunyoro Kitara Empire.

27. What was the contribution of Richard Kadhambi towards the revived East African Community?

28. Name the type of lake formed from a river meander.

29. State any one reason why most people in East Africa use road transport.

30. Name the major longitude which is marked 180⁰ East or 180⁰ West.

31. How does a hospital benefit people in the community?

32. Which animal is used as a means of transport in desert areas?

33. How did the British try to link Uganda to the coast of East Africa?

34. Mention the mineral which is the raw material for making petrol and diesel.

35. Compare the anemometer and the barometer in terms of functions.

36. In which geographical region is Nigeria located?

FOR EACH OF THE QUESTIONS 36 TO 40, ANSWER EITHER THE CHRISTIAN OR THE ISLAMIC QUESTIONS BUT NOT BOTH ALTERNATIVES IN ONE NUMBER.

37. **EITHER:** How long does "**Lent season**" last?

OR: How long does "**Salem**" last?

38. **EITHER:** Why is "**Saint Stephen**" remembered in Christianity?

OR: Why is "**Summayyah**" remembered in Islam?

39. **EITHER:** How did Adam and Eve cause evil and suffering into the world?

OR: How did Adam and Hawa cause evil and suffering into the world?

40. **EITHER:** Name the country in Africa where Jesus once lived.

OR: Name the country in Africa where Prophet Issa once lived?

41. **EITHER:** Write **A.T.R** in full.

OR: Write **P.B.U.H** in full.

SECTION B: (60 Marks)

42. (a) What official title is given to the person who heads the Uganda police force in the country?

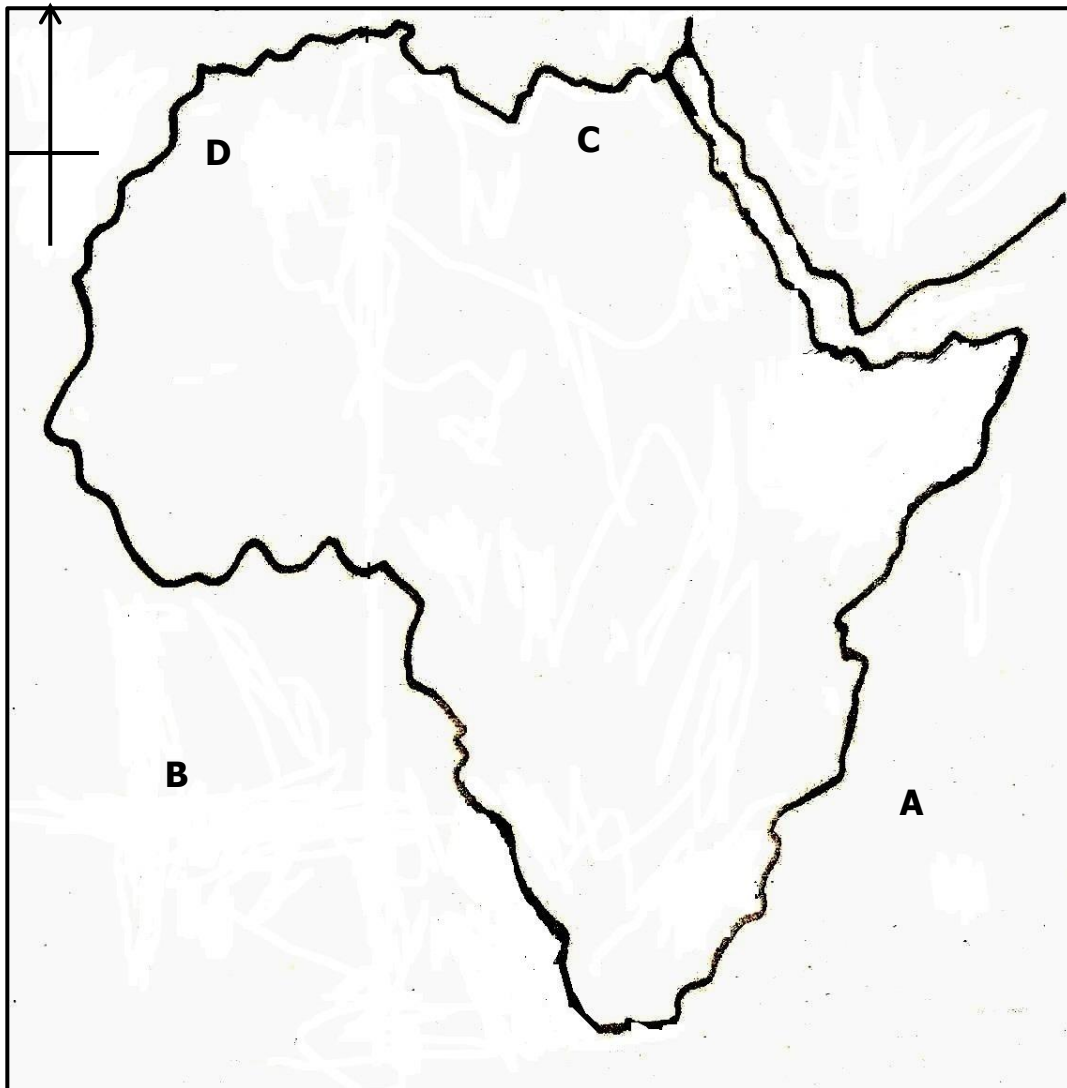
(b) In which **two** was does the Uganda Police Force help in maintaining law and order in the country?

(i) _____

(ii) _____

(c) How can citizens help the Police to maintain law and order in the community?

43. **Study the map of Africa below carefully and use it to answer the questions about it.**



(a) Which type of ocean currents are marked with letter **A**?

(b) Name the water body marked with letter **B**.

(c) Name the shaded country marked with letter **C**.

(d) How were the mountains marked with letter **D** formed?

44. (a) State **two** reasons why the white settlers chose to settle on the Kenya highlands.

(i) _____

(ii) _____

(b) Name the person who was the leader of the white settlers in Kenya.

(c) How did the settlement of the white settlers on the Kenya highlands affect the Kikuyu?

45. (a) State the contribution of each one of the following persons towards the political development of Uganda.

(i) The late Grace Ibingira _____

(ii) Gregory Maloba _____

(iii) Peter Wingard _____

(b) State the date, the month and the year when Uganda achieved her independence.

46. **The table below shows some of the continents that make up the world. Rewrite them down in order of size from the largest to the smallest continent.**

No	NAME OF CONTINENT
(a)	North America
(b)	Australia
(c)	Asia
(d)	Africa

(a) _____

(b) _____

(c) _____

(d) _____

46. (a) What are "**Lagoon lakes**"?

(b) Why does the coast of West Africa have many Lagoons?

(c) Name any **two** countries of West Africa with many lagoons.

47. Name any **two** founder presidents of;

(a) The former East African Community.

(i) _____

(ii) _____

(b) The revived East African Community.

(i) _____

(ii) _____

48. (a) List down the **three** arms / organs of a democratic government.

(i) _____

(ii) _____

(iii) _____


(b) Under which ministry is the Uganda people's Defence Force?

49. (a) What is the importance of a key on a map?


(b) State one reason why symbols are used on a map.

(c) Draw the map symbol for;

(i) A hill



(ii) a plateau



50. (a) How did the following become leaders in a district in Uganda?

(i) Chairperson local council five.

(ii) Chief Administrative officer.

(b) Mention any **two** types of leaders in a district in Uganda.

(i) _____

(ii) _____

FOR EACH OF THE NUMBERS 51 TO 54 ANSWER EITHER THE CHRISTIAN OR ISLAMIC QUESTIONS ONLY, BUT NOT BOTH.

51. EITHER:

(a) Write down any **TWO** miracles that were performed by Jesus Christ.

(i) _____

(ii) _____

(b) Why did Jesus Christ perform miracles?

OR:

(a) Write down any **TWO** pillars of Imani.

(b) Why do Moslems pray five times a day?

52. EITHER:

(a) Who was the mother of Jesus Christ?

(b) Name the angel who brought God's message to the mother of Jesus Christ.

(c) Mention any gospel book in the Bible.

(d) What term is given to the wonderful things that Jesus Christ performed?

OR:

(a) Who was the mother of Prophet Isa?

(b) Name the angel who brought Allah's message to the mother of Prophet Isa.

(c) Mention the holy book of Allah that was revealed to Prophet Isa.

(d) What term is given to the wonderful things that Prophet Isa performed?

53. EITHER:

Match the Prophets in List A with their respective descriptions in List B.

LIST A	LIST B
(a)	Known for his perseverance
(b)	Known for his role of deliverance
(c)	Built an ark
(d)	Agreed to go to settle in a foreign land.

- (a) Moses _____
- (b) Noah _____
- (c) Abraham _____
- (d) Job _____

OR:

Match the Prophets in List A with their respective descriptions in List B.

LIST A		LIST B
(a)	Nuhu	Known for his perseverance
(b)	Musa	Known for his role of deliverance
(c)	Ibrahim	Built an ark
(d)	ayub	Agreed to go to settle in a foreign land.

- (a) Musa _____
- (b) Nuhu _____
- (c) Ibrahim _____
- (d) Ayub _____

54. EITHER:

(a) What is a 'Sacrament'?

(b) Name **three** examples of sacraments.

- (i) _____
- (ii) _____
- (iii) _____

OR:

(a) What is 'Ibadat'?

(b) Mention **three** types of ibadat.

- (i) _____
- (ii) _____
- (iii) _____

55. FOR BOTH CHRISTIANS AND MOSLEMS

Apart from Islam and Christianity, name any **four** other major world religions.

- (i) _____
- (ii) _____
- (iii) _____
- (iv) _____

